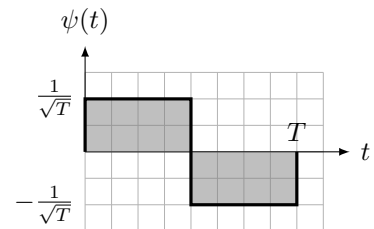


PROBLEM 1. Derive the power spectral density of the random process

$$X(t) = \sum_{i \in \mathbb{Z}} X_i \psi(t - iT - \Theta),$$

where $\{X_i\}_{i \in \mathbb{Z}}$ is an i.i.d. sequence of uniformly distributed random variables taking values in $\{\pm\sqrt{\mathcal{E}}\}$, Θ is uniformly distributed in the interval $[0, T]$, and $\psi(t)$ is as shown in the plot (called Manchester pulse). The Manchester pulse guarantees that $X(t)$ has at least one transition per symbol, which facilitates the clock recovery at the receiver.



PROBLEM 2. Consider the random process

$$X(t) = \sum_{i \in \mathbb{Z}} X_i \sqrt{\mathcal{E}_s} \psi(t - iT_s - T_0),$$

where T_s and \mathcal{E}_s are fixed positive numbers, $\psi(t)$ is some unit-energy function, T_0 is a uniformly distributed random variable taking values in $[0, T_s)$, and $\{X_i\}_{i \in \mathbb{Z}}$ is the output of the convolutional encoder described by

$$X_{2n} = B_n B_{n-2}, \quad X_{2n+1} = B_n B_{n-1} B_{n-2},$$

with i.i.d. input sequence $\{B_i\}_{i \in \mathbb{Z}}$ taking values in $\{\pm 1\}$.

- Express the power spectral density of $X(t)$ for a general $\psi(t)$.
- Plot the power spectral density of $X(t)$ assuming that $\psi(t)$ is a unit-norm rectangular pulse of width T_s .

PROBLEM 3. From the decoder's point of view, inter-symbol interference (ISI) can be modeled as follows:

$$Y_i = X_i + Z_i$$

$$X_i = \sum_{j=0}^L B_{i-j} h_j, \quad i \in \mathbb{N} \quad (*)$$

where B_i is the i th information bit, h_0, \dots, h_L are coefficients that describe the inter-symbol interference, and Z_i is zero-mean, Gaussian, of variance σ^2 , and statistically independent of everything else. Relationship (*) can be described by a trellis, and the ML decision rule can be implemented by the Viterbi algorithm.

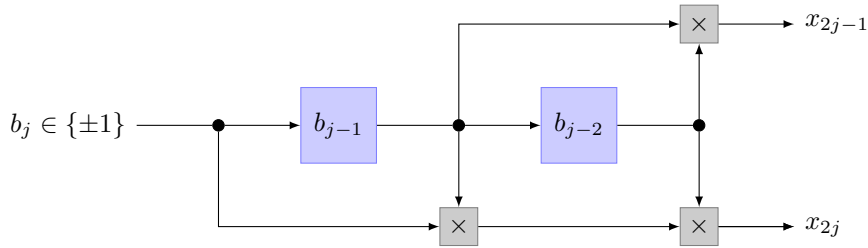
- Draw the trellis that describes all sequences of the form X_1, \dots, X_6 resulting from information sequences of the form $B_1, \dots, B_5, 0$, $B_i \in \{0, 1\}$, assuming

$$h_i = \begin{cases} 1, & i = 0 \\ -2, & i = 1 \\ 0, & \text{otherwise} \end{cases}$$

To determine the initial state, you may assume that the preceding information sequence terminated with 0. Label the trellis edges with the input/output symbols.

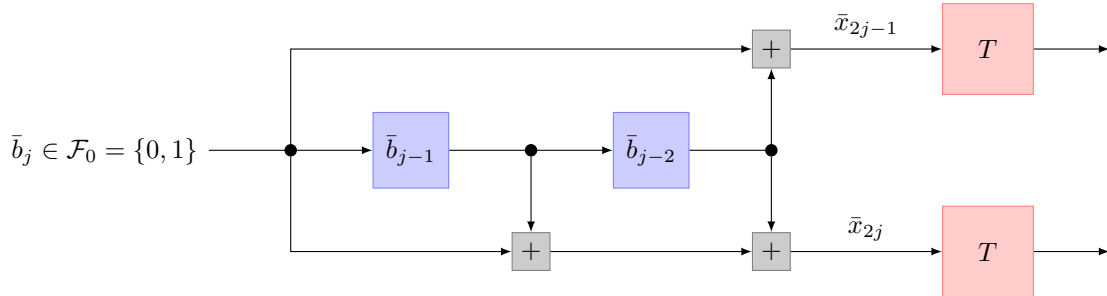
- (b) Specify a metric $f(x_1, \dots, x_6) = \sum_{i=1}^6 f(x_i, y_i)$ whose minimization or maximization with respect to the valid x_1, \dots, x_6 leads to a maximum likelihood decision. Specify if your metric needs to be minimized or maximized.
- (c) Assume $y_1, \dots, y_6 = \{2, 0, -1, 1, 0, -1\}$. Find the maximum likelihood estimate of the information sequence B_1, \dots, B_5 .

PROBLEM 4. An output sequence x_1, \dots, x_{10} from the convolutional encoder shown below is transmitted over the discrete-time AWGN channel. The initial and final state of the encoder is $(1, 1)$. Using the Viterbi algorithm, find the maximum likelihood information sequence $\hat{b}_1, \dots, \hat{b}_4, 1, 1$, knowing that b_1, \dots, b_4 are drawn independently and uniformly from $\{\pm 1\}$ and that the channel output $y_1, \dots, y_{10} = \{1, 2, -1, 4, -2, 1, 1, -3, -1, -2\}$. (It is for convenience that we are choosing integers rather than real numbers.)

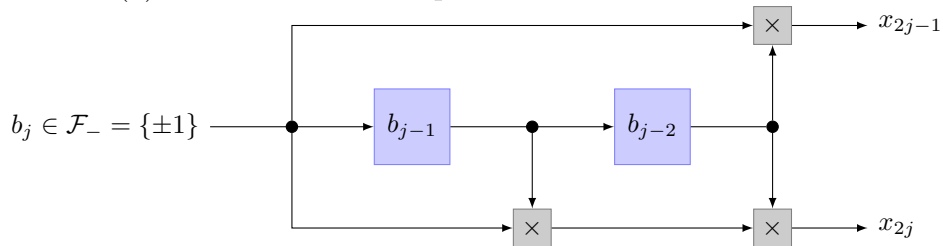


PROBLEM 5. Consider the following two encoders where the map $T : \mathcal{F}_0 \rightarrow \mathcal{F}_-$ sends 0 to 1 and 1 to -1 . Show that the two encoders produce the same output when their inputs are related by $b_j = T(\bar{b}_j)$.

Hint: For $a, b \in \mathcal{F}_0$, $T(a + b) = T(a) \times T(b)$, where addition is modulo 2 and multiplication is over \mathbb{R} .



(a) Conventional description. Addition is modulo 2.



(b) Description used in the book. Multiplication is over \mathbb{R} .

Comment: The encoder of (b) is linear over the field \mathcal{F}_- , whereas the encoder of (a) is linear over \mathcal{F}_0 only if we omit the output map T . The comparison of the two figures should explain why in this chapter we have opted for the description of (b) even though the standard description of a convolutional encoder is as in (a).